

Lourdes Central School Bejai Mangaluru
English Revision Worksheet

Literature

I Fill in the blanks with the appropriate answer.

1. Alice had brought _____ for lunch.
2. Rekha was sad because _____.

II Write the opposites

1. dull
2. rough

III Identify the correctly spelt word and write

1. break/brack
2. friend/freind

IV Who said these words to whom?

1. "How do you like the school now?"
2. "We have a new student in class."

V Answer the following questions.

1. Why was Alice worried?
2. Who was Rekha's class teacher?

Grammar

I Identify the odd one and write.

- | | | | |
|-----------|---------|---------|-------------|
| 1. rabbit | fan | month | Sunday |
| 2. father | brother | queen | boy |
| 3. parent | teacher | nephew | grandparent |
| 4. table | door | ring | hens |
| 5. sister | niece | son | daughter |
| 6. Ganga | pen | Tuesday | January |

II Identify the predicate in the following sentences.

1. The ant was very helpful.
2. The mango is sweet.

III Identify the subject in the following sentences.

1. The snail was crawling on the ground.
2. The shopkeeper sells cheese and eggs.

IV Write whether the given sentence is a –Question, Exclamatory, Statement, Request or Command.

1. Stand in a line.
2. How old are you?
3. May I come in?
4. Rabbits live in burrows.
5. Hurrah! We have won the match.

V Write the plurals

- | | |
|-----------|----------|
| 1. cat | 2. bush |
| 3. tomato | 4. fox |
| 5. bus | 6. bench |

Comprehension

Read the passage carefully and answer the following questions

Mary was a little girl who was just 5 years old, lived in a small town with her old grandmother. She had very long hair. Her grandmother once gifted her a blue umbrella on her birthday. Mary loved to walk around with her lovely umbrella.

I Fill in the blanks

1. Mary lived in a _____.
2. Mary was _____ years old.

II State whether the following statements are true or false.

1. Mary had very short hair. _____
2. Mary got red umbrella on her birthday.

III Answer the following.

1. Whom did Mary live with?
2. Who gifted Mary an umbrella on her birthday?

Creative Writing

Complete the following sentences in your own words

1. My brother _____.
2. Do not _____.
3. Take care _____.
4. May I _____?
5. We sat _____.

लूडस सेंट्रल स्कूल , बेजई

Hindi worksheet

दिनांक-06/07/22

अवधि - 50 मिनट

नाम _____ कक्षा - 3 _____ अनुक्रमांक _____ कुल अंक- 20

1. सही शब्द चुनकर खाली स्थान भरिए :-

(शेर , हँसता , भोजन , रोता)

(क) शेर _____ करके आराम कर रहा था ।

(ख) _____ आग बबूला हो उठा ।

(ग) कक्कू दिनभर _____ रहता है ।

2. सही कथन पर (✓) और गलत कथन पर (x) का निशान लगाए :-

(क) कक्कू को मज़ाक करना पसंद है । ()

(ख) कक्कू झगड़ालू लड़का है । ()

(ग) शेर मक्खी से हार गया । ()

3. प्रश्नों के उत्तर लिखिए :-

(क) शेर जंगल में क्या कर रहा था ?

(ख) कक्कू को सक्कू क्यों बुलाते थे ?

4. किसने कहा ? किससे कहा ?

(क) दूर हट वरना. मैं तुझे जान से मार डालूँगा ।

5. अर्थ लिखिए :-

(क) कककू (ख) स्नान (ग) मंद - मंद

6. विलोम लिखिए :-

(क) दिनभर x ----- (ख) पास x -----

8. लिंग बदलिए :-

(क) माता ----- (ख) हाथी

8. वचन बदलिए

(क) मकड़ी (ख) पंजा

9. अंकों को शब्दों में लिखिए :-

(क) 11 (ख) 5

10. मुहावरों के अर्थ लिखिए :-

(क) घमंड में चूर होना

(ख) नौ - दो ग्यारह होना

11. वाक्य बनाइए :-

(क) दूगड़लू

LOURDES CENTRAL SCHOOL, BEJAI MANGALURU
PERIODIC TEST 1 SUBJECT: MATHS CLASS 3 MAX MARKS: 20
Model Paper **DURATION: 50 MINUTES**

I. Fill in the blanks:

$$\frac{1}{2} \times 4 = 2$$

1. _____ is the smallest 4 - digit number.
2. Numbers that can be put into pairs are called _____ number.
3. The face value of 4 in 5647 is _____.
4. The smallest 4 - digit number formed by the digit 7,0,0,9 is _____.

II. Match the following:

$$\frac{1}{2} \times 4 = 2$$

1. $7000 + 70 + 8$	9480
2. $6000 + 200 + 30 + 9$	1810
3. $1000 + 800 + 10$	6239
4. $9000 + 400 + 80 + 0$	7078

III. Solve the following:

$$1 \times 6 = 6$$

1. Write the number in descending order: 95, 91, 109, 99, 100.
2. Write the number in ascending order: 7582, 7959, 7166, 7745
3. Put $>$, $<$ or $=$ symbol: 6633 _____ 6633 b. 5432 _____ 7654
4. Circle the greatest number: 1285, 1055, 1135, 7865
5. Write the expanded form in figures: 4098
6. Write the number name of: 7098

IV. Solve the following:

$$2 \times 5 = 10$$

1. Show the number on the abacus: 7543
2. Add: $4065 + 2831$
3. Use the given digits to make the smallest and greatest 4-digit number:
a. 2, 0, 8, 3 b. 9, 1, 1, 6
4. Write the predecessor and successor of: a. 6399 b. 9876.
5. Aarti has two stamps. One album has 2306 stamps. The other album has 3143 stamps. How many stamps does Aarti have in all?

LOURDES CENTRAL SCHOOL, BEJAI, MANGALURU

PERIODIC TEST 1 Model Test Paper

SUBJECT: SOCIAL SCIENCE

CLASS: 3

MAX MARKS: 20

DATE:

DURATION: 50 MINUTES

I. Fill in the blanks by choosing the correct option:

$\frac{1}{2} \times 4 = 2$

1. A building is part of the _____ environment (natural, human - made)
2. Farmers pollute the soil by using harmful _____ .(gases ,fertilisers)
3. _____ is an example for natural environment.(soil, roads)
4. For human beings, food is a _____ .(want, need)

II. Match the following

$\frac{1}{2} \times 4 = 2$

- | | |
|--------------------------|-------------------------|
| 1. Swachh Bharat Abhiyan | want |
| 2. Car | harming the environment |
| 3. Pollution | need |
| 4. Shelter | 2014 |

III. State True or False

$\frac{1}{2} \times 4 = 2$

1. Non-living things cannot move. _____
2. We need water to live. _____
3. Smoke, waste and fertilizers pollute our environment. _____
4. For human beings, air is a need. _____

IV. Name the following:

$\frac{1}{2} \times 4 = 2$

1. Anything that surrounds us _____
2. Basic necessities or requirements for life. _____
3. Something harmful enters the environment and spoils it. _____
4. To damage something so badly that it no longer exists. _____

V. Answer the following in a sentence:

1X 5= 5

1. Give two examples for living things.
2. What is paper made of?
3. When is the World Environment Day celebrated?
4. Give two examples for human -made Environment.
5. List any two needs.

LOURDES CENTRAL SCHOOL, BEJAI MANALURU

Model Test paper

SUBJECE: SCIENCE

CLASS: III

MAX MARKS:20

DATE: 07 .07 .2022

DURATION: 50 MINUTES

I. Fill in the blanks.

$\frac{1}{2}$ X4=2

- 1.All food chains start with _____.
- 2.We get leather from _____.
- 3.Animals that eat flesh of other animals are called _____.
- 4.We get wool from _____.

II. Write True or False.

$\frac{1}{2}$ X4=2

- 1.Petroleum is used to make paper.
- 2.Cow chews the cud.
- 3.We get jute from jute plants.
- 4.Animals can make their own food.

III. Name the following.

$\frac{1}{2}$ X4=2

- 1.An example for omnivore animal
- 2.Any two materials from animals.
- 3.An animal with a long, sharp and pointed teeth
- 4.Two things made from clay

IV. Match the following.

$\frac{1}{2}$ X4=2

- | | |
|--------------|------------------------|
| 1. Jewellery | long and sticky tongue |
| 2.paper | silver |
| 3. Chameleon | have small mouths |
| 4.Snakes | Pine tree. |

V. Answer the following in a sentence.

1X5=5

1. Where do we get rubber from?

2. Why do living things need food?

3. Name any one material that we get from plants.

4. Complete the food chain given below.

_____ -->rabbit -->fox

5. Name a material used to make eraser.

VI. Answer the following questions.

2X3=6

1. Explain the term "chewing the cud"

2. Where do we get paper from?

3. Explain the following words and give one example for each kind of animal

1. Herbivore

2. Omnivore

VII. Think and answer.

1. Why should we not use too many things made of plastics ?

1X1=1 EA


ಲೂಡ್ಸ್ ಸೆಂಟ್ರಲ್ ಸ್ಕೂಲ್
ಕನ್ನಡ ಮಾದರಿ ಪರೀಕ್ಷೆ ೩ತರಗತಿ


೧

14×¼=3½

ಅ ದಿ೦ದ ಅ: ವರೆಗೆ ಬರೆಯಿರಿ

೨. ಬಿಟ್ಟಿರುವ ಅಕ್ಷರವನ್ನು ಬರೆಯಿರಿ. ½×6=3

ಚ----ಚ  ೩ palace ---- ವನ

----ಟ  ೪. ಕ----ಲ 

೫.washerman ----ಗನ ಓ.bathing ಜ --ಕ

೬. ಬಿಟ್ಟಿರುವ ವ್ಯಂಜನಗಳನ್ನು ಬರೆಯಿರಿ 24×¼=6

ಕ-ಗ--

ಚ_ಜ__

---ಡ---

ತ--ಧ--

ಪ---ಮ

-ರ--ಶ--ಹ--

½×5=2½

೪. ಹೊಂದಿಸಿ ಬರೆಯಿರಿ

ಸರ -cow

ವದನ -medal

ದನ-face

ಗಗನ-chain

ಪದಕ -sky



೫.ಚಿತ್ರವನ್ನು ಗುರುತಿಸಿ



$\frac{1}{2} \times 10 = 5$

೧.  _____ ೨.  _____

೩.  _____ ೪.  _____

೫.  _____ ೬.  _____

೭.  _____ ೮.  _____

೯.  _____ ೧೦.  _____