

Name ..... Sec..... Roll No .....

**A Who said these words?** 2

1. It is your turn, Mary! .....
2. Dear calf, do you know my name? .....
3. I promise, I promise.. ..
4. Then Grandma will make halwa for us. ....

**B Write True or False** 2

1. Mary was scared .....
2. Mary's mother cleaned the room. ....
3. Liza loves flowers .....
4. Appu's friends helped him. ....

**C Frame Sentences** 3

1. Food .....
2. sad .....
3. mother.....

**D Answer the following** 8

1. Why was Mary scared?

Ans .....  
.....

2. Why was the tiny animal sad?

Ans .....  
.....

3. Why did Liza become very sad and afraid ?

Ans.....  
.....

4. Why did Appu want to grow carrots?

Ans .....  
.....

### Grammar

A. Arrange the following in Alphabetical Order 2

1. N S P O A T ..... 2. B G C M E L .....

2. R Q N F Y A ..... 4. G K S T Y N .....

B. Underline the Special Names. 2

1. Sam and I went to Bengaluru.

2. Delhi is the capital of India.

C. Write person place animal or thing 3

1. tongue ..... 4. classroom .....

2. king ..... 5. crow .....

3. axe ..... 6. shopkeeper.....

D. Complete the following with the correct form of doing words. 2  
( write, come, go, cook )

1. I am .....to my aunt's house.

2. She is .....very neatly.

3. My mother ..... tasty food.

4. Rahul ..... early to school

E. Rearrange the words to make proper sentences. 2

1. easy exam was my very

.....

2. house to tomorrow come my

.....



**F. Fill in the blanks with 'has' or 'have'**

**2**

1. They .....a big car.
2. I .....many friends.
3. She .....two dolls.
4. It .....many designs.

**G. Add 'ing' to these verbs. Drop the 'e' where required.**

**2**

- |               |               |
|---------------|---------------|
| 1. sing ..... | 3. thank..... |
| 2. come.....  | 4. like.....  |

**COMPREHENSION**

**5**

**Read the passage and answer the questions:**

Bonzo was a small dog. It lived on the streets. Some people who passed by gave some food to Bonzo. One day a boy named Sonu took Bonzo to his house. He gave it some food and water. He also gave it a bed to sleep. Bonzo was happy. It loved Sonu.

1. The dog's name was .....
2. The dog lived on the road ( true / false ).....
3. Bonzo never had any food to eat. ( true / false ).....
4. ....took Bonzo to his house
5. What did Sonu give Bonzo?

.....  
.....

6. Bonzo loved Sonu because .....
- .....

A. Write a few sentences on the topic **My Home**

.....

.....


.....

.....

.....

B. Look at the picture and write a few sentences.

2



.....

.....

.....

.....

.....



लूड्स सेंटरल स्कूल, बिजई

मॉडल पेपर

विषय- हिन्दी

दिनांक -09/09/2022

कक्षा- 2

अंक -40

खंड -क

1. सही शब्द चुनकर खाली स्थान भरिए :-

2½

(क) जलपरी \_\_\_\_\_ में रहती थी। (तालाब / नदी)

(ख) फलों का राजा \_\_\_\_\_ है। (केला / आम)

(ग) मई महीने में \_\_\_\_\_ बढ़ जाती है। (गर्मी / सर्दी)

(घ) रेखा पाठशाला \_\_\_\_\_ जाती थी। (पैदल / बस)

(ङ) रेखा \_\_\_\_\_ कक्षा में पढ़ती है। (दूसरी / तीसरी)

2. सही कथन पर (✓) और गलत कथन पर (X) का चिन्ह लगाइए :-

2½

(क) रेखा चतुर थी। ( )

(ख) पपीते में विटामिन सी होता है। ( )

(ग) नानी प्राची को आइसक्रीम खिलाती थी। ( )

(घ) जवाहर हिन्द देश का उज्ज्वल सितारा था। ( )

(ङ) सूरज की किरण धरती पर आठ मिनट में प है। ( )

3. सही अर्थ से मिलान कीजिए :-

2

(क) कुल्हाड़ी

लकड़ियों का बोझा

(ख) लकरहड़ा

रोशनी

(ग) गट्टर

लकड़ी काटने का औज़ार

(घ) प्रकाश

लकड़ी काटने वाला

4. सही उत्तर पर (✓) का निशान लगाएँ :-

3

(क) जलपरी ने लकड़हारे को कितनी कुल्हाड़ी दी ?

एक

तीन

(ख) पुलिसवाला कहाँ खड़ा था ?

सिगनल के पास

चौराहे पर

(ग) प्राची कहाँ गई ?

नानी के घर

दादी के घर

(क) हिंद देश का उज्ज्वल सितारा कौन था ?

(ख) पौधा क्यों सूख गया ?

(ग) रेखा पढ़ाई में कैसी थी ?

(घ) फलों का राजा कौन है ?

(ङ) प्राची किसके घर जाना चाहती थी ?

### खंड-ख

1. अर्थ लिखिए:-

2

(क) हिम्मत \_\_\_\_\_

(ख) शक्ति \_\_\_\_\_

(ग) प्रसन्न \_\_\_\_\_

(घ) क्षमा \_\_\_\_\_

2. वचन बदलिए:-

2

(क) चिड़िया \_\_\_\_\_

(ख) परी \_\_\_\_\_

(ग) कुल्हाड़ी \_\_\_\_\_

(घ) पौधा \_\_\_\_\_

3. विलोम लिखिए:-

2

(क) सच \_\_\_\_\_

(ख) धरती \_\_\_\_\_

(ग) दिन \_\_\_\_\_

(घ) मुश्किल \_\_\_\_\_

4. लिंग बदलिए :-

2

(क) नाना \_\_\_\_\_

(ख) मामी \_\_\_\_\_

5. शब्दों को अंको में लिखिए :-

2

(क) पाँच \_\_\_\_\_

(ख) आठ \_\_\_\_\_

(ग) सोलह \_\_\_\_\_

(घ) बीस \_\_\_\_\_

6. अंको को शब्दों में लिखिए:-

2

(क) 2 \_\_\_\_\_

(ख) 7 \_\_\_\_\_

(ग) 11 \_\_\_\_\_

(घ) 17 \_\_\_\_\_



### खण्ड-ग

1. चित्र देखकर नाम लिखें :-

4

(आम, पेड़, आइसक्रीम, कुल्हाड़ी)



2. सही शब्द पर घेरा लगाएँ :-

2

(क) पाठशाला / पाठसाला

(ख) मिनट / मीनट

(ग) ईमानदारी / इमानदारी

(घ) उज्ज्वल / उजवल

3. वाक्य बनाइए :-

2

(क) आम - .....

(ख) रोशनी - .....

### खण्ड-घ

रमेश और सुरेश मित्र थे। दोनों दूसरी कक्षा में पढ़ते थे। एक दिन वे दोनों मेला देखने गए। वहाँ नाव के आकार का झूला था। पर सुरेश के पास टिकट के लिए पैसे नहीं थे। इसलिए रमेश ने टिकट के लिए बीस रुपये दिए।

गद्यांश को पढ़कर प्रश्नों के उत्तर लिखें :-

5

(क) कौन - कौन अच्छे मित्र थे ?

.....

(ख) रमेश ने टिकट के लिए कितने रुपये दिए ?

.....

(ग) वो दोनों \_\_\_\_\_ कक्षा में पढ़ते थे।

(घ) वहाँ \_\_\_\_\_ के आकार का झूला था।

(ङ) \_\_\_\_\_ के पास टिकट के लिए पैसे नहीं थे।

ಲೂಡ್ಸ್ ಕೇಂದ್ರೀಯ ವಿದ್ಯಾಲಯ, ಬಿಜ್ಜೆ ಮಂಗಳೂರು

ಅಭ್ಯಾಸ ಪತ್ರಿಕೆ

ಅವಧಿ: 1:30

ಅಂಕಗಳು: 40

ಹೆಸರು-----ಕ್ರಮಸಂಖ್ಯೆ-----ವಿಭಾಗ--

I. ಅಕ್ಷರ ಆರಿಸಿ ಪದ ಪೂರ್ಣಗೊಳಿಸಿ . (Choose the correct letter)

6

- |                      |                     |
|----------------------|---------------------|
| 1. ಗರ _____ಸ (ದ ಗ ಅ) | 7. ಸ _____ರ (ದ ಪ ರ) |
| 2. ದ _____ರ (ಗ ಸ ರ)  | 8. ಗ _____ನ (ಸ ಗ ನ) |
| 3. ಅ _____ರ (ದ ಮ ಸ)  | 9. _____ಮನ (ಸ ನ ಮ)  |
| 4. ದ _____ (ಸ ಗ ರ)   | 10. _____ರ (ರ ಮ ಪ)  |
| 5. ಮ _____ (ಮ ಗ ಜ)   | 11. _____ನ (ನ ಮ ಜ)  |
| 6. ಗ _____ (ಬ ಸ ಜ)   | 12. ಬ _____ (ನ ಜ ಸ) |

II. ಹೊಂದಿಸಿ ಬರೆಯಿರಿ: (Match the following)

5

- |        |    |
|--------|----|
| ೧. ಚ   | ಋ  |
| ೨. ಫಿ  | ಭೈ |
| ೩. ಋ   | ಚ  |
| ೪. ಭೈ  | ಫಿ |
| ೫. ಜೀ  | ರೋ |
| ೬. ಟಾ  | ಡೇ |
| ೭. ರೋ  | ಜೀ |
| ೮. ಡಂ  | ಝಾ |
| ೯. ಝಾ  | ಡಂ |
| ೧೦. ಡೇ | ಟಾ |



III. ಕನ್ನಡ ಅಂಕಿಗಳನ್ನು ಬರೆಯಿರಿ:(Write kannada numbers)

3

೧. 4

೪. 26

೨. 15

೫. 38

೩. 22

೬. 50

IV. ಗುಣಿತಾಕ್ಷರವನ್ನು ಬರೆಯಿರಿ (Write gunitaksharagalu)

8

೧. \_\_\_\_\_ ಖಾ \_\_\_\_\_ ಖ್ಯಾ \_\_\_\_\_ ಖೈ \_\_\_\_\_

ಖೌ \_\_\_\_\_

೨. ಚ \_\_\_\_\_ ಚು \_\_\_\_\_ ಚೇ \_\_\_\_\_ ಚೋ \_\_\_\_\_

ಚಃ \_\_\_\_\_

೩. ಟ \_\_\_\_\_ ಟು \_\_\_\_\_ ಟೋ \_\_\_\_\_ ಟೋ \_\_\_\_\_

ಟಂ \_\_\_\_\_

೪. ಠ \_\_\_\_\_ ಠೇ \_\_\_\_\_ ಠ್ಯಾ \_\_\_\_\_ ಠೋ \_\_\_\_\_

ಠಂ ಠಃ

V. ಅ ದಿಂದ ಅಃ ದವರೆಗೆ ಬರೆಯಿರಿ (Write a to aha)

3

|   |  |  |  |  |  |  |  |  |  |  |  |  |  |  |    |
|---|--|--|--|--|--|--|--|--|--|--|--|--|--|--|----|
| ಅ |  |  |  |  |  |  |  |  |  |  |  |  |  |  | ಅಃ |
|---|--|--|--|--|--|--|--|--|--|--|--|--|--|--|----|

VI. ಬಿಟ್ಟ ಸ್ಥಳ ತುಂಬಿರಿ: (Match the following)

4

|   |   |   |   |    |
|---|---|---|---|----|
| ಕ |   |   |   | ಜ  |
| ಛ |   |   | ಝ |    |
| ಟ |   | ಢ |   | ಣ  |
|   | ಫ | ಬ |   | ಬ  |
| ಪ |   | ಬ |   | ಪು |
| ಯ |   |   | ಛ |    |
|   | ಝ | ಕ | ಕ |    |

VII. ಚಿತ್ರ ಗುರುತಿಸಿ ಪದ ಪೂರ್ಣಗೊಳಿಸಿ(identify the pictures and write)1x4=4

೧.



(ಉರಗ, ಅರಸ)

೨.



(ನಗರ, ದಸರ)

೩.



(ರಸ, ಬನ)

VIII. ಪದಗಳ ಅರ್ಥ ಬರೆಯಿರಿ(write the meanings)

1x4=4

೧. ದರ = \_\_\_\_\_

೫. ಜನ = \_\_\_\_\_

೨. ಅರಸ = \_\_\_\_\_

೬. ಮರ = \_\_\_\_\_

೩. ರಸ = \_\_\_\_\_

೭. ಉರಗ = \_\_\_\_\_

೪. ನಗರ = \_\_\_\_\_

೮. ಬನ = \_\_\_\_\_

IX. ಪ್ರಾಸ ಪದ ಬರೆಯಿರಿ: (Rhyming words)

1x4=4

೧. ಸದರ \_\_\_\_\_

೫. ಸರಸ \_\_\_\_\_

೨. ದರ \_\_\_\_\_

೬. ಸಮ \_\_\_\_\_

೩. ಜನ \_\_\_\_\_

೭. ಗಜ \_\_\_\_\_

೪. ಉರಗ \_\_\_\_\_

೮. ಉದರ \_\_\_\_\_



LOURDES CENTRAL SCHOOL, BEJAI, MANGALURU

MID TERM EXAM -MODEL PAPER -MATHEMATICS CLASS 2 2022

Name: \_\_\_\_\_ Section : \_\_\_\_\_ Date: \_\_\_\_\_ Total marks:40

I. Choose the correct answer and fill in the blanks.

$\frac{1}{2} \times 6 = 3$

1. The eighth month of the year \_\_\_\_\_

- a) October                      b) September                      c) August

2. \_\_\_\_\_ has the least number of faces.

- a) Cube                      b) Sphere                      c) Cylinder

3.  $8 \times \underline{\hspace{2cm}} = 16$

- a) 2                      b) 4                      c) 1

4. 1 hour = \_\_\_\_\_ minutes.

- a) 24                      b) 60                      c) 12

5.  $590 + 10 = \underline{\hspace{2cm}}$

- a) 495                      b) 500                      c) 600

6.  $900 - 900 = \underline{\hspace{2cm}}$

- a) 0                      b) 700                      c) 1

II. Match the following.

$\frac{1}{2} \times 6 = 3$

- |                 |             |
|-----------------|-------------|
| 1) Tube light   | a) cone     |
| 2) Birthday cap | b) sphere   |
| 3) Dice         | c) cube     |
| 4) CD image     | d) cuboid   |
| 5) Book         | e) cylinder |
| 6) Earth        | f) circle   |

III. Fill in the blanks.

$\frac{1}{2} \times 6 = 3$

1. The number of sides in a square is \_\_\_\_\_

2. Numeral for nine hundred forty is \_\_\_\_\_

3. The number between 559 and 561 is \_\_\_\_\_

4. The place value of 3 in 403 is \_\_\_\_\_

5. A number is \_\_\_\_\_ if it has 1, 3, 5 7 or 9 in the ones place.

6.  $891 + \underline{\hspace{2cm}} = 893$

IV. Solve the following

$1 \times 10 = 10$

1. Write in the expanded form:  $460 = \underline{\hspace{2cm}} + \underline{\hspace{2cm}} + \underline{\hspace{2cm}}$

2. Write in the short form. a)  $600 + 80 = \underline{\hspace{2cm}}$  b)  $700 + 3 = \underline{\hspace{2cm}}$

3. Write the number names. a) 602 =

b) 920 =

4. Circle the largest number with blue & smallest with red. 120, 804, 672, 981, 204

5. Write numbers from 520 to 540.

6. Write in ascending order. 562, 265, 506, 656, 567

7. Add

a) H T O

$$\begin{array}{r} 173 \\ + 258 \\ \hline \end{array}$$

b) H T O

$$\begin{array}{r} 259 \\ + 184 \\ \hline \end{array}$$

8. Subtract

a) H T O

$$\begin{array}{r} 700 \\ - 434 \\ \hline \end{array}$$

b) H T O

$$\begin{array}{r} 581 \\ - 393 \\ \hline \end{array}$$

V. Do as directed.

$$2 \times 6 = 12$$

1. A shopkeeper sold 580 eggs on Monday and 237 eggs on Tuesday. How many eggs did he sell in the two days?

|  |  |  |
|--|--|--|
|  |  |  |
|  |  |  |
|  |  |  |
|  |  |  |

2. A flower seller had 912 flowers. He sold 559 of them. How many flowers are left with him?

|  |  |  |
|--|--|--|
|  |  |  |
|  |  |  |
|  |  |  |
|  |  |  |



3. Write 7 days of the week.

---

---

4. Draw the clock to show the time.

a. 9:30



b. 7:00



5. Look at the picture and write number of sides and corners each shape has.


Number of sides

Number of corners

a.




b.




6. Draw the abacus to show the number.

a. 780



b. 540



VI. Think and answer

1x3=3

1. Insert > or <: a) 276 \_\_\_\_ 761    b. 930 \_\_\_\_ 309    c. 550 \_\_\_\_ 270    d. 840 \_\_\_\_ 408

2. See the clock and write the time.

a. \_\_\_\_\_



b. \_\_\_\_\_



3. Answer this riddles.

b) I am the shortest month, I have 28 days. I have branches but no fruits. What month is it?

### VII. Activity

1. Look at this calendar and answer the below questions.

3x2=6

## August

| Sun | Mon | Tue | Wed | Thu | Fri | Sat |
|-----|-----|-----|-----|-----|-----|-----|
|     | 1   | 2   | 3   | 4   | 5   | 6   |
| 7   | 8   | 9   | 10  | 11  | 12  | 13  |
| 14  | 15  | 16  | 17  | 18  | 19  | 20  |
| 21  | 22  | 23  | 24  | 25  | 26  | 27  |
| 28  | 29  | 30  | 31  |     |     |     |

a. How many days are in August?

b. What day of the week is 7<sup>th</sup> August?

c. Which month comes just after August?

2. Draw a house using the plane figures.



MID TERM EXAM-MODEL PAPER-EVS

Name ..... Sec..... Roll No ..... Date: .....

Class :2

Max Marks : 40

Duration : 1hr 30 min

**I. Write True or False**

4

1. My eyes help me to breathe. ....
2. We must eat different kinds of foods. ....
3. When we are ill we go to the market. ....
4. The cobbler stitches new clothes for us. ....
5. We live in our home with our parents. ....
6. We get food from animals. ....
7. Potato, chilli and brinjal are fruits. ....
8. We get eggs from hens and ducks. ....

**II. Match the following**

4

- |                    |   |                         |         |
|--------------------|---|-------------------------|---------|
| 1. Police          | - | buy stamps              | (     ) |
| 2. Market          | - | maintain law and order  | (     ) |
| 3. Bank            | - | puts off fire           | (     ) |
| 4. Fire brigade    | - | buy things of daily use | (     ) |
| 5. Post office     | - | give us medicine        | (     ) |
| 6. Hospital        | - | keep money              | (     ) |
| 7. Mother's father | - | grandmother             | (     ) |
| 8. Mother's mother | - | grandfather             | (     ) |



1. I like to play .....
2. The different kinds of dals are known as.....
3. Organs found inside our body are called.....
4. My brother is my uncle's.....
5. A ..... fits and mends the taps and pipes.
6. A..... is the office of the local police.
7. To stay healthy and strong, we should eat .....
8. My mother's sister is my.....
9. I can..... on my own.
10. Fire fighters use ..... to put out fires.

IV. Choose the correct answer.

4

1. If Kavya wants to learn to read she will go to  
a .....(teacher/doctor)
2. Good health makes the family..... (happy / sleepy)
3. We send parcels through a ..... (fire station / postoffice)
4. We hear with our..... (eyes / ears)
5. We keep our money in the .....(bank / park)
6. We use our .....to write (feet / hand)
7. We must keep our neighbourhood..... (clean / dirty)
8. Parks are..... place.(small/big)

V. Circle the odd word

3

- |           |         |           |         |
|-----------|---------|-----------|---------|
| 1. Mango  | Apple   | Banana    | Potato  |
| 2. Wheat  | Corn    | Almond    | Pulses  |
| 3. Cow    | Duck    | Buffalo   | Goat    |
| 4. Fish   | Chicken | Ghee      | Meat    |
| 5. Radish | Tomato  | Beetroot  | Carrot  |
| 6. Doctor | Teacher | Principal | Student |



**VI. Give two examples for the following.**

1. Energy giving food .....
2. Protective foods .....
3. Body building food .....
4. Grains .....
5. Fruits .....

3

**VII. Answer in one word**

1. Builds a wall .....
2. Repair cars and scooters .....
3. Selling items in a shop .....
4. Help us to learn in school .....
5. Who sells fruits in a shop .....
6. Rice is a .....

**VIII. Answer the following in a sentences**

10

1. What is a neighbourhood?

Ans .....

.....

2. What is digestion?

Ans .....

.....

3. What is family?

Ans.....

.....

4. Who are non-vegetarians ?

Ans.....

.....

5. How do police men help us?

Ans.....

.....

### **IX. Drawing**

2

Draw 5 sense organs.

Draw your family and name them.