

Lourdes Central School Bejai , Mangaluru

Maths Annual Exam Model Paper 2023

Name: _____ Roll No. _____ Class : 1 ____ Marks: 40

I. Fill in the blanks.

3 marks

- 1) + means to put together or _____.
- 2) 4 tens and 3 ones = _____.
- 3) 4 groups of 2 is written as $4 \times \underline{\quad} = \underline{\quad}$
- 4) The _____ hand is called the minute hand.
- 5) $43 - 0 = \underline{\quad}$.
- 6) $45 + 5 = \underline{\quad}$.

II. Choose the words from the brackets and fill in the blanks.

3 marks

- 1) A clock tells us the _____. (time / days)
- 2) Four 50 paise coins make _____. (2 rupees / 1 rupee)
- 3) 8 o'clock is also written as _____. (8 : % / 8: 00)
- 4) There are _____ months in a year. (21 / 12)
- 5) $40 + 4 = \underline{\quad}$. (14 / 44)
- 6) March is the _____ month of the year. (third / fourth)

III. Match the following.

3 marks

- | | | |
|--------------------|--------|-----|
| a) $4 \times 2 =$ | i) 16 | () |
| b) $5 \times 4 =$ | ii) 21 | () |
| c) $3 \times 3 =$ | iii) 8 | () |
| d) $10 \times 4 =$ | iv) 20 | () |
| e) $7 \times 3 =$ | v) 9 | () |
| f) $4 \times 4 =$ | vi) 40 | () |

IV. Solve

1. Write in the expanded form.

2 marks

a) 25 - _____ tens and _____ ones.

b) 96 - _____ tens and _____ ones.

c) 70 - _____ tens and _____ ones.

d) 89 - _____ tens and _____ ones.

2. Write in ascending order.

2 marks

a) 56, 87, 34 _____

b) 67, 15, 51 _____

3. Write in descending order.

2 marks

c) 66, 23, 89 _____


d) 43, 89, 65 _____

4. Write the multiplication facts.

3 marks

a)  _____ X _____ = _____

b)  _____ X _____ = _____

c)  _____ X _____ = _____

5. Add

2 marks

$$\begin{array}{r} \text{T O} \\ 4 \ 2 \\ + \ 7 \\ \hline \end{array}$$

$$\begin{array}{r} \text{T O} \\ 5 \ 3 \\ + \ 4 \\ \hline \end{array}$$

$$\begin{array}{r} \text{T O} \\ 6 \ 4 \\ + 2 \ 3 \\ \hline \end{array}$$

$$\begin{array}{r} \text{T O} \\ 7 \ 5 \\ + 1 \ 0 \\ \hline \end{array}$$

6. Add with regrouping.

2 marks

$$\begin{array}{r} \text{T O} \\ 3 \ 6 \\ + \ 9 \\ \hline \end{array}$$

$$\begin{array}{r} \text{T O} \\ 7 \ 5 \\ + \ 8 \\ \hline \end{array}$$

$$\begin{array}{r} \text{T O} \\ 4 \ 6 \\ + 2 \ 7 \\ \hline \end{array}$$

$$\begin{array}{r} \text{T O} \\ 3 \ 9 \\ + 1 \ 6 \\ \hline \end{array}$$

7. Subtract.

2 marks

$$\begin{array}{r} \text{T O} \\ 76 \\ - 3 \\ \hline \end{array}$$

$$\begin{array}{r} \text{T O} \\ 86 \\ - 4 \\ \hline \end{array}$$

$$\begin{array}{r} \text{T O} \\ 99 \\ - 45 \\ \hline \end{array}$$

$$\begin{array}{r} \text{T O} \\ 45 \\ - 31 \\ \hline \end{array}$$

8. Subtract with regrouping.

2 marks

$$\begin{array}{r} \text{T O} \\ 71 \\ - 7 \\ \hline \end{array}$$

$$\begin{array}{r} \text{T O} \\ 94 \\ - 6 \\ \hline \end{array}$$

$$\begin{array}{r} \text{T O} \\ 82 \\ - 48 \\ \hline \end{array}$$

$$\begin{array}{r} \text{T O} \\ 60 \\ - 27 \\ \hline \end{array}$$

V. Do as directed

1. Write the number names for the following.

2 marks

a) 32 - _____

b) 57 - _____

c) 73 - _____

d) 89 - _____

2. Tick the things that are heavy.

1 marks



3. Tick the things that hold less.

1 marks



4. Write the time shown in the clock.

2 marks



5. Match the total value of things you can buy.

2 marks

a)			₹ 50	()
b)			₹ 10	()
c)			₹ 2	()
d)			₹ 5	()

Think and answer





3 marks

- The number which comes after 9 tens and 8 ones is _____
- Tick which holds less? a) Two spoons of oil b) Bottle of oil
- The day before Friday is _____

Activity

1. Look at the picture and answer the following.

3 marks

Our Class' Favorite Sports	
Soccer	
Baseball	
Football	
Basketball	

1. Write how many kids like each sport.

 _____
  _____
  _____
  _____

2. Which sport does our class like the most? _____

3. Which sport does our class like the least? _____

LOURDES CENTRAL SCHOOL, BEJAI MANGALURU

ENGLISH MODEL PAPER MARCH 2023

Class: 1

Max Marks: 40

Date: 07.03.2023

Duration: 1½ Hour

Name: Sec: Roll No:

I. Literature:

A. Complete the following sentences:

2 marks

1. Arun and Tara reach school on _____.
2. The birds in the cages looked very _____.
3. Tony comes to a _____.
4. Fatima dressed up as a _____.

B. Circle the correct word:

2 marks

1. Arun and Tara **walk** / **fly** to school.
2. Tony catches a fat **fish** / **frog** .
3. Grandfather told the shopkeeper not keep **birds** / **toys** in cages.
4. Fatima's dress was made up of **old newspaper**/ **chart paper**.



C. Write the opposites for the following:



2 marks

1. wet x _____
2. dirty x _____
3. weak x _____
4. hot x _____

D. Write words for the pictures and make new words:

2 marks

1.  + mark = _____
3.  + flower = _____

2.  + coat = _____
4. basket +  = _____

E. Who said these words ?

3 marks

1. "I have dirt on me." _____

2. "Let us go to the pet shop." _____

3. "I am so proud of my class!" _____

F. Answer the following questions:

4 marks

1. What does Devi Ram do?

Ans: _____

2. Where does Tony roam?

Ans: _____

3. What does the shopkeeper promise Grandfather?

Ans: _____

4. What did Ben's mother use to make the mane?

Ans: _____

II. Grammar:

A. Write the yesterday words for the following:

2 marks

1. wash - _____

3. open - _____

2. pack - _____

4. jump - _____

B. Fill in the blanks with the words from the brackets:

3 marks

1. The hat is _____ the tree. (**in / under**)

2. Hari is sitting _____ a chair. (**on / under**)

3. The ducks are swimming _____ the pond. (**in / on**)

C. Fill in the blanks with 'a' or 'an':

2 marks

1. _____ cup

3. _____ ox

2. _____ igloo

4. _____ table

D. Fill in the blanks with correct adjectives from the box:

3 marks

1. Radha has _____ hair.
2. The baker baked a _____ cake.
3. The water in the pool is very _____.
4. A mouse is a _____ animal.
5. The elephant has a _____ trunk.
6. My mother is very _____.

kind
small
cool
brown
tasty
long

E. Match the words that go together:

2 marks

- | | |
|-----------|---------------|
| 1. moon | a. mother () |
| 2. bread | b. chair. () |
| 3. father | c. stars () |
| 4. table | d. butter () |

F. Underline the correct verb in these sentences:

3 marks

1. Balloons **float** / **laugh** in the sky.
2. I **wash** / **talk** my hands before having food.
3. Ravi **plays** / **cooks** with a ball.
4. The duck **swims** / **sings** in the pond.
5. Sam **drinks** / **hugs** milk everyday.
6. The baby **runs** / **smiles** in the cradle.

III. Comprehension:

A. Read the passage carefully and answer the following questions:

Tweety is a sparrow. It lives in a tree. It has built a nest.
The nest is made of straws and twigs. It has three baby birds. They are very small. They cannot fly.
Tweety brings seeds for them. They are very happy when it feeds them.



1. Write True or False:

1 mark

- a) Tweety is a butterfly. _____
- b) The baby birds feel very happy when Tweety feeds them. _____

2. Fill in the blanks:

2 marks

- a) Tweety lives in a _____.
- b) The nest is made up of _____.

3. Answer these questions:

2 marks

- a) What does Tweety bring for the baby birds?

Ans: _____

- b) How many baby birds does Tweety have?

Ans: _____

IV. Creative Writing:5 marks

A. Look at the picture and complete the sentences using the words from the box:

fun cycling park care bench balloons trees happy playing swinging
--



The family is in the _____. A balloon man is selling _____.

There are some shady _____. The children are _____.

Father is sitting on a _____. The little girl is _____.

Mother is taking _____ of her son while playing on the slide.

Grandpa is _____. The family is having _____ and

all are _____.

LOURDES CENTRAL SCHOOL BEJAI, MANGALURU

EVS MODEL PAPER MARCH 2023

Class: 1

Max Marks: 40

Date: 07.03.2023

Duration: 1½ Hour

Name:Sec: Roll No:

I. Fill in the blanks with words from the box:

1/2x5=2 1/2

Earth	rain	zebra	tree skin
-------	------	-------	-----------

1. Early people used animal _____ to cover their bodies.
2. Neem is a _____.
3. We live on the _____.
4. Dark clouds bring _____.
5. We must cross the road at a _____ crossing.

II. Write True or False:

1/2x5=2 1/2

1. Early people learnt to make the wheel. _____
2. Deserts are wet areas covered in sand. _____
3. We must always follow the safety rules. _____
4. Wolf is a farm animal. _____
5. The fig tree grows in cold places. _____

III. Tick the correct words from the brackets:

1/2x5=2 1/2

1. We must walk on the (**footpath** / road).
2. (**Rose** / Lotus) grows in lakes and ponds.
3. A (**dog** / donkey) guards the farm.
4. We can see the sun during the (**day** / night).
5. Early people ate (**meat** / rice) without cooking it.

IV. Match the following:

$\frac{1}{2} \times 5 = 2\frac{1}{2}$

- 1. Stars pet animal ()
- 2. Knife tree ()
- 3. Catsky ()
- 4. Stone sharp thing ()
- 5. Coconuttool of Early people ()

V. Answer in one word:

$1 \times 5 = 5$

- 1. The thing that we cannot see but we can feel when it moves. _____
- 2. The flat areas of land. _____
- 3. The thing we find in rivers, seas and oceans. _____
- 4. The plant that grows in deserts. _____
- 5. The thing that helped Early people to keep warm. _____

VI. Draw and colour:

$2 \times 3 = 6$

A tree	A pet animal	A traffic light

VII. Give two examples for each:

$1 \times 5 = 5$

- 1. Shrubs:
- 2. Creepers:
- 3. Climbers:
- 4. Pet animals:
- 5. Farm animals:

VIII. Find names of wild animals in the grid:

1x4=4



C	L	I	O	N	V	T
p	Z	E	B	R	A	I
S	R	U	H	J	G	G
G	I	R	A	F	F	E
Q	T	Y	K	V	W	R



IX. Answer the following questions:2x5=10

1. What are herbs?

Ans:

.....

2. What are farm animals?

Ans:

.....

3. What happens if we do not follow the safety rules?

Ans:

.....

4. What is the earth made up of?

Ans:

.....

5. Where did the Early people live?

Ans:

.....




ಲಾಡ್ಲೆ, ಸೆಂಟ್ರಲ್ ಸ್ಕೂಲ್ ಬಿಟ್ಟು - ಮಂಗಳೂರು
ಮಾದರಿ ಪ್ರಶ್ನೆ ಪತ್ರಿಕೆ - ಕನ್ನಡ ಂ ನೇ ತರಗತಿ

ನೇಮರು _____ ಕ್ರಮಸಂಖ್ಯೆ _____ ವಿಭಾಗ _____ ತಾರೀಖು _____

I. ಐಚ್ಛಿಕ ಅಕ್ಷರಗಳನ್ನು ಒರೆಯಿರಿ. (Fill in the missing letters) 3

ಕ			ಕ	
ಚ		ಚ		
ಟ	ಟ		ಟ	ಟ
ತ			ತ	
ಪ		ಪ		ಪು

II. ಸರಿಯಾದ ಅಕ್ಷರಕ್ಕೆ ಹೊಂದಿಸಿ ಒರೆಯಿರಿ: (Match the following) 4

1.  ಧ ()
2.  ಳ ()
3.  ಳ ()
4.  ಳ ()
5.  ಳ ()
6.  ಳ ()
7.  ಳ ()
8.  ಳ ()

III. ಕೊಟ್ಟಿರುವ ಸಂಖ್ಯೆಯನ್ನು ಕನ್ನಡದಲ್ಲಿ ಬರೆಯಿರಿ: (Write the numbers in kannada) 5

11 _____

5 _____

14 _____

13 _____

6 _____

8 _____

3 _____

17 _____

20 _____

9 _____

IV. ಕೊಟ್ಟಿರುವ ಸಂಖ್ಯೆಯನ್ನು ಬರೆಯಿರಿ: (Write the numbers in English) 2

೧೨ _____

೦೫ _____

೧ _____

೪ _____

೯ _____

೧೦ _____

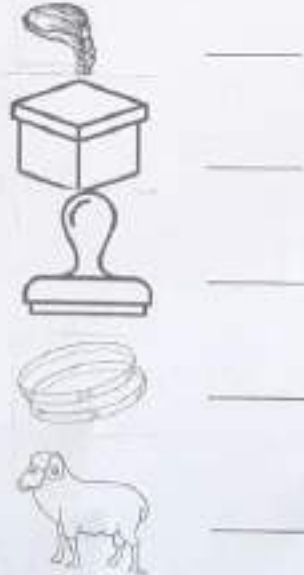
೧೯ _____

೧೮ _____

V. ಯು ದಿಂದ ೪ ವರೆಗೆ ಅಕ್ಷರವನ್ನು ಬರೆಯಿರಿ: (Write the letters) 3

ಯು _____ ಫ _____

VI. ಈ ಕೆಳಗಿನ ಚಿತ್ರದಲ್ಲಿ ಬರುವ ಅಕ್ಷರವನ್ನು ಬರೆಯಿರಿ: (Write the letters for the given pictures) 5





VII. ಈ ಕೆಳಗಿನ ಅಕ್ಷರವನ್ನು ಗಮನಿಸಿ ಸರಿಯಾದ ಚಿತ್ರವನ್ನು ಬಿಡಿಸಿ: (Draw the pictures for the given letters)

5

ಮ

ರ

ಶ

ಸ

ಹ

ಋ

ೠ

ಌ

ೡ

ಐ

VIII. ಗುರಿಗೆ ಸರಿದ ಚಿತ್ರಗಳಿಗೆ ವೃತ್ತ ಹಾಕಿ: (Circle the odd one out)

3



IX. ಕೊಟ್ಟಿರುವ ಅಕ್ಷರಕ್ಕೆ ಸರಿಯಾದ ಚಿತ್ರವನ್ನು ಗುರುತಿಸಿ ವೃತ್ತ ಹಾಕಿ: (Circle the correct picture for the given letter)

2 ½



X. ಕೊಟ್ಟಿರುವ ಚಿತ್ರಕ್ಕೆ ಸರಿಯಾದ ಅಕ್ಷರವನ್ನು ಗುರುತಿಸಿ ವೃತ್ತ ಹಾಕಿ: (Circle the correct letter for the given picture)

2 ½



ಕ

ಛ



ಛ

ಯ



ಕ

ಛ



ಛ

ರ



ಕ

ಕ

XI. ಕೊಟ್ಟಿರುವ ಅಕ್ಷರಗಳನ್ನು ಅಂದವಾಗಿ ಬರೆಯಿರಿ: (Write the given letters neatly)

5

1. ಕ ಛ ಗ ಛ

2. ಯ ರ ಲ ಛ

3. ಕ ಛ ಸ ಛ

4. ಛ ಕ ಛ ಕ

5. ಛ ಕ ಕ ಕ

लुइर्स सेंट्रल स्कूल बिजई मंगलूर

अभ्यास पत्रिका

विषय- हिन्दी दिनांक: 20.03.2023 अवधि: 90 मिनट अंक-40

नाम_____ कक्षा -1___ अनुक्रमांक___

खंड-क

1. सही शब्द पर गोला लगाइए - 3
बिल / बिल आवाज़ / अवाज़ गाजर / गजार
खेचना/ खोजना खेत / केत पखड़ / पकड़
2. लिंग बदलकर लिखिए - 4
बाघ - शेर -
बिलाव- चूहा-
3. अंकों को शब्दों में लिखिए - 4
12 - 15 -
17 - 20 -
4. शब्दों को ऐ ही मात्रा लगाइए - 3
पदल मना थला सनिक बल भया
5. शब्दों को ओ की मात्रा लगाइए - 3
म र ट लक ट करी ध बी सम सा ह ली
6. सही उत्तर पर (✓) का निशान लगाइए - 4
क. घर के बाहर कौन पहरा देता है ?
चौकीदार - सौदागर -

ख. पंख किसके होते हैं ?

जानवरों के - पक्षियों के -

ग. आश्रय ने कौन-सा चित्र बनाया ?

पहाड़ - वृक्ष -

घ. चीकू बिल्ली को कहीं ले गया ?

गाय के पास - हाथी के पास -

7. वचन बदलकर लिखिए -

5

बच्चा - चूहा - केला -

बसता - पत्ता -

खंड - ख

1. प्रश्नों के उत्तर लिखिए -

4

क. बिल्ली ने किसे पकड़ा ?

ख. डोल किसने बचाया ?

ग. पूड़ी किससे नहीं बनेगी ?

घ. चीकू और मीकू कहीं रहते थे ?

2. सही शब्द चुनकर रिक्त स्थान भरिए - 2

क. मीकू किसी के घर में _____ दूँदने गया । (सूरज, खाना)

ख. सबने _____ का त्यौहार मनाया । (होली, पानी)

ग. चीकू बिल्ली को एक _____ के पास ले गया । (मैडक, गाय)

घ. थैला भरकर _____ लाओ । (लौकी, शेर)

3. दिए गए जगह में रंग भरिए - 3

लाल - काला -

पीला - नीला -

हरा - भूरा -

4. व्यंजनों के साथ दसखड़ी लिखिए - 5

ख - _____

प - _____

भ - _____

म - _____

च - _____