

**LOURDES CENTRAL SCHOOL, BEJAI, MANGALURU**

**MODEL PAPER - CLASS 2 – MATHEMATICS**

Name: \_\_\_\_\_ Section : \_\_\_\_ Roll No: \_\_\_\_\_ Date: \_\_\_\_\_ Total marks:40

**I. Choose the correct answer and fill in the blanks.**

$\frac{1}{2} \times 6 = 3$

- When 1 whole is divided into 4 equal parts, each part is called a \_\_\_\_\_  
a)  $\frac{1}{2}$                       b)  $\frac{1}{4}$                       c)  $\frac{1}{3}$
- 1 Km = \_\_\_\_\_ m  
a) 100                      b) 1000                      c) 10
- $5 \times 4 = 20$ , here 20 is called \_\_\_\_\_  
a) product                      b) quotient                      c) sum
- 500 paise = ₹ \_\_\_\_\_  
a) 50                      b) 500                      c) 5
- $60 \times 0 =$  \_\_\_\_\_  
a) 60                      b) 0                      c) 600
- $\frac{1}{2}$  Kg = \_\_\_\_\_ grams  
a) 100                      b) 500                      c) 1000

**II. Match the following.**

$\frac{1}{2} \times 6 = 3$

- |                 |        |
|-----------------|--------|
| 1. $7 \times 3$ | 36 ( ) |
| 2. $9 \times 2$ | 24 ( ) |
| 3. $4 \times 6$ | 56 ( ) |
| 4. $5 \times 8$ | 18 ( ) |
| 5. $8 \times 7$ | 40 ( ) |
| 6. $6 \times 6$ | 21 ( ) |

**III. Fill in the blanks.**

$\frac{1}{2} \times 6 = 3$

- $2 + 2 + 2 + 2$  can also be written as \_\_\_\_\_
- A \_\_\_\_\_ represents numbers as pictures.
- $0 \div 2 =$  \_\_\_\_\_ .
- We use \_\_\_\_\_ to weigh lighter objects.
- Multiplication is the opposite of \_\_\_\_\_
- $4 \times 3 =$  \_\_\_\_\_  $\times 3$ .

**IV. Solve the following.**

12

- Write 2 division facts.  $6 \times 5 = 30$  \_\_\_\_\_
- a) 600 p = ₹ \_\_\_\_\_      b) 400 p = ₹ \_\_\_\_\_
- 550 cm = \_\_\_\_\_ m \_\_\_\_\_ cm
- $30\text{cm} - 3\text{cm} =$  \_\_\_\_\_ cm
- $50\text{ paise} + 50\text{ paise} + 50\text{ paise} + 50\text{ paise} =$  ₹ \_\_\_\_\_

6.  $6 \text{ Kg} + 4 \text{ Kg} = \underline{\hspace{2cm}} \text{ Kg}$   
 7.  $700\text{g} - 250\text{g} = \underline{\hspace{2cm}} \text{ g.}$   
 8.  $500 \text{ ml} + 500 \text{ ml} = \underline{\hspace{2cm}} \text{ ml}$   
 9. Write the change ₹ 7 =

10. **H T O**

$$\begin{array}{r} 302 \\ \times 3 \\ \hline \end{array}$$

11. a)  $36 \div 9 = \underline{\hspace{2cm}}$       b)  $24 \div 3 = \underline{\hspace{2cm}}$

12. **H T O**

$$\begin{array}{r} 72 \\ \times 20 \\ \hline \end{array}$$

**V. Do as directed.**

**10**

1. Find the product. a) **H T O**

$$\begin{array}{r} 17 \\ \times 4 \\ \hline \end{array}$$

b) **H T O**

$$\begin{array}{r} 48 \\ \times 40 \\ \hline \end{array}$$

2. Find the quotient.

a)

$$\underline{\hspace{2cm}} \overline{) 35}$$

\_\_\_\_\_

\_\_\_\_\_

b)

$$\underline{\hspace{2cm}} \overline{) 54}$$

\_\_\_\_\_

\_\_\_\_\_

3. a) **₹ P**

$$\begin{array}{r} 839 \\ + 470 \\ \hline \end{array}$$

\_\_\_\_\_

b) **Kg g**

$$\begin{array}{r} 935 \\ + 1870 \\ \hline \end{array}$$

\_\_\_\_\_

$$\begin{array}{r}
 \text{4. a) m} \quad \text{cm} \\
 5 \quad 9 \quad 0 \\
 - 3 \quad 9 \quad 3 \\
 \hline
 \hline
 \end{array}$$

$$\begin{array}{r}
 \text{b) l} \quad \text{ml} \\
 6 \quad 0 \quad 0 \quad 0 \\
 - 4 \quad 4 \quad 2 \\
 \hline
 \hline
 \end{array}$$

5. Raju's mother gave him ₹ 60. He spent ₹ 22 on a cricket bat. How much money was left with him?


**VI. Think and answer.**

3

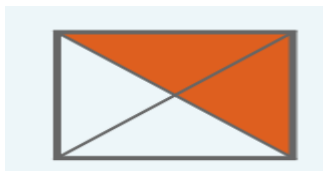
- How many 50 paise coins make ₹ 4. \_\_\_\_\_
- Sam has 4 boxes of pencils. There are 8 pencils in each box. How many pencils does he have? \_\_\_\_\_
- What fraction of the Indian flag is coloured white? \_\_\_\_\_

**VII. Activity**

A. Write the fraction for the shaded pictures.

1

1.




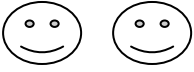



\_\_\_\_\_

2.



\_\_\_\_\_

Days	Number of students were absent
Monday	
Tuesday	
Wednesday	
Thursday	
Friday	

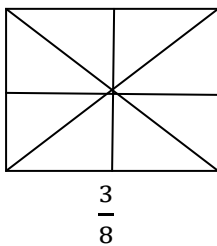
B. Look at the tables & answer the below questions.

1. How many children were absent on Thursday? \_\_\_\_\_
2. Which day 3 children were absent? \_\_\_\_\_
3. How many children were absent altogether? \_\_\_\_\_
4. Which day the maximum children were absent?
5. How many children were absent on Monday more than on Tuesday? \_\_\_\_\_
6. On which day only two children were absent? \_\_\_\_\_

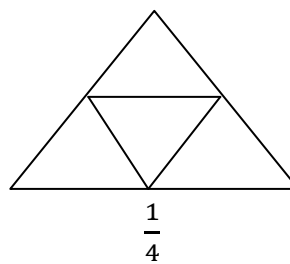
C. Shade the fraction written below each figure.

2

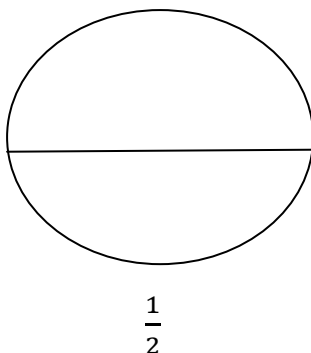
1.



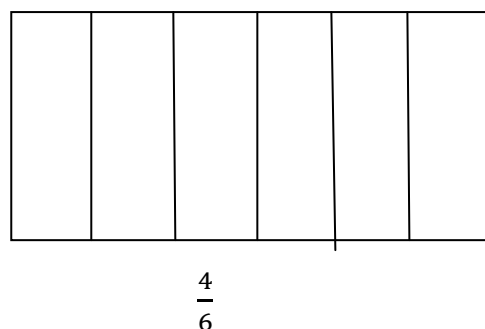
2.



3.



4.



LOURDES CENTRAL SCHOOL BEJAI MANGALURU

EVS MODEL PAPER 2023

CLASS II

TOTAL MARKS 40

NAME \_\_\_\_\_ SEC: \_\_\_\_\_ ROLL NO \_\_\_\_\_

**I. Fill in the blanks:**

$1/2 \times 10 = 5$

1. Shrubs have hard woody \_\_\_\_\_.
2. \_\_\_\_\_ from the sheep is used to make warm clothes.
3. People travel by \_\_\_\_\_ on a ship.
4. Garbage and other wastes into the seas make the water \_\_\_\_\_.
5. When it is dark and moon and stars appear in the sky its \_\_\_\_\_.
6. We wear cotton clothes in \_\_\_\_\_.
7. Early people ate \_\_\_\_\_ and \_\_\_\_\_.
8. In \_\_\_\_\_ season days are short and nights are long.
9. Each number on the face of the clock stands for \_\_\_\_\_ hour.
10. We get fibre like \_\_\_\_\_ and \_\_\_\_\_ from plants.

**II. Match the following:**

$1/2 \times 6 = 3$

- |                 |         |     |
|-----------------|---------|-----|
| 1. Hibiscus     | tea     | ( ) |
| 2. Wild animal  | monsoon | ( ) |
| 3. Milk         | minute  | ( ) |
| 4. Big band     | paneer  | ( ) |
| 5. Rainy season | plant   | ( ) |
| 6. Hilly area   | boar    | ( ) |

**III. Write True or False:**

$1/2 \times 8 = 4$

1. The wheels of bus or train are square \_\_\_\_\_.
2. December, January and February are summer months \_\_\_\_\_.
3. February has 31 days \_\_\_\_\_.
4. A large area of flat land is called a plain \_\_\_\_\_.

5. Plants are our friends \_\_\_\_\_.
6. We get milk from cows \_\_\_\_\_.
7. Very high trees are called mountains \_\_\_\_\_.
8. It snows in some places in the mountains during winter \_\_\_\_\_.

**IV. Choose the correct answer:**

$\frac{1}{2} \times 8 = 4$

1. Mint is a \_\_\_\_\_ (shrub, herb)
2. Wild animals live in the \_\_\_\_\_ (park, forest)
3. Living things cannot live on earth without \_\_\_\_\_ (air, mobile)
4. Plants and animals need \_\_\_\_\_ to live (water, mobiles)
5. To know the exact time we look at a \_\_\_\_\_ (clock, sun)
6. We wear \_\_\_\_\_ clothes to keep ourselves warm. (woollen, cotton)
7. There are \_\_\_\_\_ months in a year (12, 31)
8. We must use water \_\_\_\_\_ (carefully, carelessly)

**V. Circle the odd word:**

$\frac{1}{2} \times 6 = 3$

- |             |        |           |        |
|-------------|--------|-----------|--------|
| 1. bus      | train  | aeroplane | truck  |
| 2. elephant | zebra  | parrot    | deer   |
| 3. mango    | neem   | pine      | chilli |
| 4. ocean    | river  | lake      | air    |
| 5. paneer   | cheese | milk      | juice  |
| 6. lion     | tiger  | elephant  | cow    |

**VI. Give two examples for the following**

**5**

1. Domestic animals \_\_\_\_\_
2. Herbs \_\_\_\_\_
3. Land transport \_\_\_\_\_
4. Healthy food \_\_\_\_\_
5. Water bodies \_\_\_\_\_

**VII. Answer the following in two or more sentences :**

$2 \times 5 = 10$

1. How are shrubs different from herbs?

---

---

2. What are domestic animals?

---

---

3. What are different forms of land?

---

---

4. What is a season?

---

---

5. How did the early people carry the large animals they hunted?

---

---

---

**X. Life Skill:**

**1×2=2**

1. How will you take care of your health during summer season?

---

---

2. You went for picnic and saw the animals in the cage, how do you feel ?

---

---

---

**IX. Draw a plant and label its parts:**

**2**



ಲೂಡ್ಸ್ ಸೆಂಟ್ರಲ್ ಸ್ಕೂಲ್ ಬಿಜೈ - ಮಂಗಳೂರು

ಮಾದರಿ ಪ್ರಶ್ನೆ ಪತ್ರಿಕೆ - ಕನ್ನಡ 2ನೇ ತರಗತಿ

ಹೆಸರು\_\_\_\_\_ಕ್ರಮಸಂಖ್ಯೆ\_\_\_\_\_ವಿಭಾಗ\_\_\_\_\_ತಾರೀಖು\_\_\_\_\_

I. ಗುಣಿತಾಕ್ಷರವನ್ನು ಬರೆಯಿರಿ.

1x5=5

೧. ಲ \_\_\_\_\_ ಲೀ \_\_\_\_\_ ಲ್ಯ \_\_\_\_\_ ಲೌ \_\_\_\_\_

ಲೌ \_\_\_\_\_

೨. ಶ \_\_\_\_\_ ಶು \_\_\_\_\_ ಶೃ \_\_\_\_\_ ಶೈ \_\_\_\_\_

\_\_\_\_\_

೩. ಷ \_\_\_\_\_ ಷಾ \_\_\_\_\_ ಷೂ \_\_\_\_\_ ಷೈ \_\_\_\_\_

ಷಂ \_\_\_\_\_

೪. ಹ \_\_\_\_\_ ಹೀ \_\_\_\_\_ ಹೈ \_\_\_\_\_ ಹೊ \_\_\_\_\_

ಹಃ \_\_\_\_\_

೫. ಳ \_\_\_\_\_ ಳಿ \_\_\_\_\_ ಳೈ \_\_\_\_\_ ಳೃ \_\_\_\_\_

ಳಃ \_\_\_\_\_

II. ಅರ್ಥವನ್ನು ಬರೆಯಿರಿ:

½ x20=10

ಏತ =

ಪಠಣ =

ಐದಳ =

ಝಳ =

ಓಟ =

ಧವಳ =

ಕವನ =

ಸಫಲ =

ಒಳ =

ಈಶ =

ಭಗ =

ಶತಕ =

ಭಟ =

ಕಂದ =

ಧನ =

ಅಂಕ =

ವದನ =

ಹನನ =

ಕದನ =

ಕಣ =

III. ಹೊಂದಿಸಿ ಬರೆಯಿರಿ:

½ x10=5

ಈ	ಹಣ ( )
ಲ	ವದನ ( )
ಊ	ಕಣ ( )
ಋ	ಎರಕ ( )
ಌ	ರಥ ( )
ಠ	ಭಯ ( )
ಡ	ಶರಣ ( )
ಢ	ಆನಂದ ( )
ಣ	ಫಲ ( )
ಠ	ಸಫಲ ( )

IV. ಅಕ್ಷರವನ್ನು ಆರಿಸಿ ಬರೆಯಿರಿ:

½ x10=5

೧. \_\_\_\_ ಕದಳ (ತ ಳ ಏ)
೨. ಕವ \_\_\_\_ (ಳ ತ ಇ )
೩. ಆವರ \_\_\_\_ ( ನ ಣ ಪ)
೪. \_\_\_\_ ಳಫಳ ( ಫ ಖ ಘ)
೫. ಓ \_\_\_\_ ಣ ( ನ ರ ಈ)
೬. \_\_\_\_ ನ ( ಧ ದ ರ )
೭. \_\_\_\_ ಠ ( ಫ ಠ ಖ)
೮. \_\_\_\_ ನ (ಫ ಪ ಮ)
೯. ಪರವ \_\_\_\_ (ಸ ಷ ಶ)
೧೦. \_\_\_\_ ಯನ ( ಶ ಮ ಚ)


VI. ಚಿತ್ರ ನೋಡಿ ಪದ ಗುರುತಿಸಿ:

½ x10=5

೧.  (ಘಟ, ತಬಲ)

೨.  ( ಆಟ, ಓಟ)

೩.  ( ಹಯ, ಛಗ)

೪.  ( ರಥ, ಏತ)

೫.  ( ಭಟ , ಧನ)

೬.  ( ಜಠರ, ಫಲ)

೭.  (ಶರ, ಪದಕ)

೮.  ( ಔಷಧ, ಅಂಗಳ)

೯.  (ಎರಕ, ಒಣಮರ)

೧೦.  (ಹಯ, ಸಲಗ)

೧೧.  ( ಐದಳ, ಮರ )

೧೨.



( ಕಂದ, ಅಂಗಳ)

VII. ಕೊಟ್ಟಿರುವ ಅಕ್ಷರ ಬಳಸಿ ಪದ ರಚಿಸಿ:

$\frac{1}{2} \times 10 = 5$

ರ ಗ ಸ ದ ಅ ಪ ಯ ವ ಟ ಚ ಲ ಡ  
ಇ ಊ ಕ ಎ ಏ ಐ ತ ಳ ಜ ಉ ಮ ಬ ನ

\_\_\_\_\_

\_\_\_\_\_

VIII. ಈ ಕೆಳಗಿನ ಪದಗಳಿಗೆ ಚಿತ್ರವನ್ನು ಬಿಡಿಸಿರಿ:

$1 \times 4 = 4$

೧. ಓಟ

೨. ಇನ

೩. ಹಣ

೪. ಊಟ

लूडर्स सेंटरल स्कूल, बेजई  
हिन्दी मॉडल पेपर

दिनांक 08 /03/2023  
अंक -40

कक्षा- 2 \_\_\_

नाम - \_\_\_\_\_

अनुक्रमांक - \_\_\_\_\_

खंड -क

1. सही शब्द चुनकर खाली स्थान भरिए :-

( भयभीत , भारत , गाँव , बीरबल , घमंड )

2

(क) विवेक और भव्या हर वर्ष अपने रिश्तेदारों से मिलने \_\_\_\_\_ आते हैं ।

(ख) \_\_\_\_\_ अकबर का मंत्री था ।

(ग) माला के दस रुपये मिलने पर रघुवीर में \_\_\_\_\_ आ गया ।

(घ) घुमावदार पगडंडी वाला रास्ता \_\_\_\_\_ में होता है ।

2. सही कथन पर (✓) और गलत कथन पर (X) का चिन्ह लगाइए :-

2

(क) दादाजी बच्चों को अपना गाँव घूमना चाहते थे । ( )

(ख) बरसाती और जूते रबड़ के बने होते हैं । ( )

(ग) अकबर के बीरबल को इनाम में मृत्युदंड दिया । ( )

(घ) माली अपनी माला को बाज़ार में बेचता था । ( )

3. सही उच्चारण वाले शब्द पर घेरा लगायें : -

2

(क) पेंसिल / पेनसिल

(ख) स्वच / स्वच्छ

(ग) मनदिर / मंदिर

(घ) अंगरक्षक / अंगरकशक

4. प्रश्नों के उत्तर लिखिए : -

6

(क) रबड़ के क्या - क्या बनता है ?

-----  
-----

(ख) अकबर ने बीरबल को इनाम में क्या दिया ?

-----  
-----

(ग) रघुवीर को घमंड कब महसूस हुआ ?

-----  
-----

(घ) शेर ने अपनी परछाई को क्या समझ लिया ?

-----  
-----

(ङ) शर्त कौन जीत गया ?

-----  
-----

(च) शुरू - शुरू में रघुवीर की माला कितने में बिकी ?

-----  
-----

**5. मिलान कीजिये :-**

2

(क) रिश्तेदार	गुस्सा
(ख) पगडंडी	सगे - संबंधी
(ग) मृत्युदंड	छोटा कच्चा रास्ता
(घ) क्रोधित	मौत की सजा

**3. सही उत्तर पर (✓) का निशान लगाएँ :-**

2

(क) दस्ताने किस से बनते हैं ?

प्लास्टिक से

रबड़ से

(ख) रघुवीर को माला बनाना उसके \_\_\_\_\_ ने सिखाया ।

पिता ने

माता ने

**खंड-ख**

**1. अर्थ लिखिए:-**

2

(क) स्वच्छ -----

(ख) सैर -----

(ग) माला -----

(घ) बादशाह -----

**2. वचन बदलिए:-**

2

(क) सड़क -----

(ख) टोपी -----

(ग) फ़सल -----

(घ) गलती -----

**3. विलोम लिखिए:-**

2

(क) खुशबू -----

(ख) ठीक -----

(ग) खुश -----

(घ) बुद्धिमान -----

**4. लिंग बदलिए :-**

2

(क) बिलाव -----

(ख) नाग -----

(ग) मौसा -----

(घ) घोड़ा -----

**5. पर्यायवाची लिखिए :-**

3

- (क) सड़क - -----  
(ख) पेड़ - -----  
(ग) किसान - -----

**6. अनेक शब्दों के लिए एक शब्द लिखिए :-**

**3**

- (क) फल खाने वाला - -----  
(ख) शहरों में रहने वाला - -----  
(ग) मांस खाने वाला - -----

**7. अंकों को शब्दों में लिखिए :-**

**2**

- (क) 5 - ----- (ख) 19 - -----  
(ग) 8 - ----- (घ) 11 - -----

**खंड -ग**

बुधवार को सोहन का जन्मदिन था | वह इस जन्मदिन पर सात साल का हो गया | वह दूसरी कक्षा में पढ़ता था | सोहन हर साल अपना जन्मदिन बहुत धूमधाम से मानता | अपने घर को वह गुब्बारों और फूलों से सजाता और गरीबों में कपड़े बाटता | सभी लोग उसके जन्मदिन पर ढेर सारे उपहार लेके आते | इस जन्मदिन पर सोहन के पिता ने उसे साइकिल उपहार में दी | सोहन अपने जन्मदिन पर बहुत खुश रहता था |

**1. गद्यांश को पढ़कर प्रश्नों के उत्तर लिखें :-**

**5**

- (क) सोहन का जन्मदिन कब था ?

-----

- (ख) पिता जी ने सोहन को उपहार में क्या दिया ?

- (ग) सोहन कौन सी कक्षा में पढ़ता था ?

**2. खाली स्थान भरो :-**

- (क) वह इस जन्मदिन पर \_\_\_\_\_ साल का हो गया |

**3. विलोम लिखिए :-**

- (क) उदास

**खंड - घ**

**1. वाक्य बनाओ**

**3**

- (क) उपवन - -----

- (ख) दफ़्तर -

- (ग) शेर -

LOURDES CENTRAL SCHOOL, BEJAI, MANGALURU

CLASS II FINAL EXAM MODEL PAPER

SUBJECT: ENGLISH

Name ..... Sec..... Roll No .....

**A Who said these words? 2**

- 1. I'm flying straight to the king! .....
- 2. Come in Varun. What is in your bag? .....
- 3. Hi, I have come to cool off. ....
- 4. We can find him a friend. ....

**B Write True or False 2**

- 1. Robin Redbreast and the King sang the Christmas song. ....
- 2. Varun and Karan played the whole day. ....
- 3. Pitpat went to the cloud to cool off. ....
- 4. Doctor gave Karan an injection. ....

**C Fill in the blanks 2**

- 1. Robin wanted to sing a .....song
- 2. Varun wanted to pack his things in a small.....
- 3. Bird hospital is opposite to .....
- 4. Pitpat is a .....

**D Answer the following 6**

1. What did Robin Redbreast and Jenny Wren do?

Ans .....  
.....

2. Who was Varun's friend?

Ans .....  
.....



3. What did Karan and Karim keep on the terrace ?

Ans.....  
.....

**E Write the opposites**

**2**

1. empty X ..... 3. tall X .....  
2. strong X ..... 4. come X .....

**F Write He or She words (Gender )**

**1**

1. bull = ..... 2. tiger = .....

**Grammar**

**A. Write a, an or the for the following**

**3**

1. .... peacock 4. .... Bible  
2. .... Himalayas 5. .... box  
3. .... bed 6. .... oven

**B. Write a suitable adjective for the following.**

**2**

1. She has a .....toy.  
2. The pan was very .....  
3. Ritu has a .....pencil.  
4. My uncle had a ..... car.

**C. Write the correct adverbs.**

**2**

1. Raja dressed ..... ( kindly / smartly )  
2. Shinu drew ..... ( suddenly / quickly )  
3. Praful played ..... ( happily / heavily )  
4. The hungry dog looked at me ..... ( clearly / sadly )

**D. Change the adjectives into adverbs.**

**2**

1. deep = ..... 3. loving = .....  
2. easy = ..... 4. happy = .....

**E. Join the two sentences using conjunctions.**

**4**

1. Suman likes juice. Suman likes sweets.  
.....

2. Do you like games? Do you like craft?  
.....

3. Baby likes to play. Baby does not like to sleep.  
.....

4. The house is big. The house is clean.  
.....

**F. Circle the correct preposition.**

**2**

1. The bird was flying .....the tree. ( in / above )

2. My school is .....my house. ( on / near )

3. We were standing .....the tree. ( under / over )

4. The rice is .....the plate. ( behind / in )

**COMPREHENSION**

**Read the passage and answer the questions:**

**5**

Once there lived a girl named Kanika in the city of Ujjain. She had many cows. She sold their milk in the shop and got some money. One day as she was coming back from the market, she saw a big cow coming towards her. All the people started to run away but Kanika did not move. The cow came near her and stood still. Kanika patted the cow and asked “ Dear Cow! Do you want to come to my house?”

1. Kanika was the name of a ..... (cow / girl )

2. Where did Kanika live?  
.....

3. Kanika had cows and buffaloes. ....( true / false )

4. She sold the milk in the .....

5. When the cow came near, Kanika ..... the cow.

6. Why do you think the cow did not harm Kanika?

.....  
.....

7. Find the opposites from the passage.

a) ended X .....

b) front X .....

### CREATIVE WRITING

A. Write a few sentences on the topic **My School Picnic to Pilikula**

2

.....  
.....  
.....  
.....  
.....  
.....  
.....

B. Look at the picture and write a few sentences.

3

.....



.....  
.....  
.....  
.....  
.....  
.....  
.....